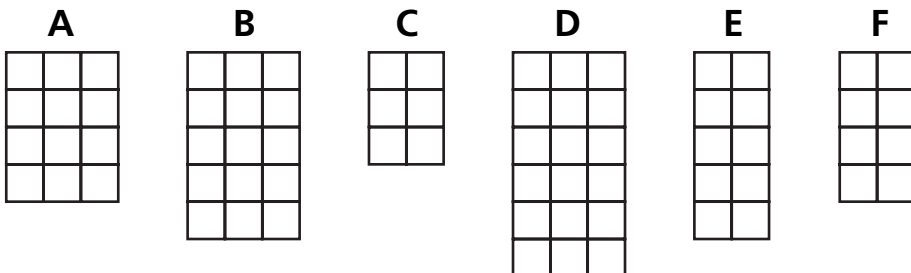








Number and Operations






Write the letter of the array that shows the same multiplication fact.



<p>1</p>  <p style="text-align: center;">C</p> <p style="text-align: center;">_____</p>	<p>2</p>  <p style="text-align: center;">_____</p>	<p>3</p>  <p style="text-align: center;">_____</p>
<p>4</p>  <p style="text-align: center;">_____</p>	<p>5</p>  <p style="text-align: center;">_____</p>	<p>6</p>  <p style="text-align: center;">_____</p>

Measurement

Write the value of the set of coins.

<p>7</p>  <p style="text-align: center;">_____</p>	<p>8</p>  <p style="text-align: center;">_____</p>	<p>9</p>  <p style="text-align: center;">_____</p>
<p>10</p>  <p style="text-align: center;">_____</p>	<p>11</p>  <p style="text-align: center;">_____</p>	