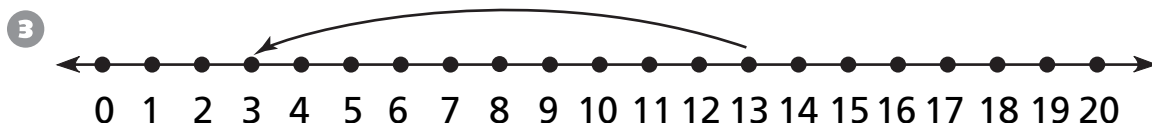
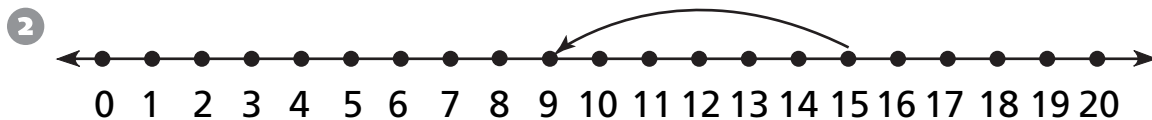
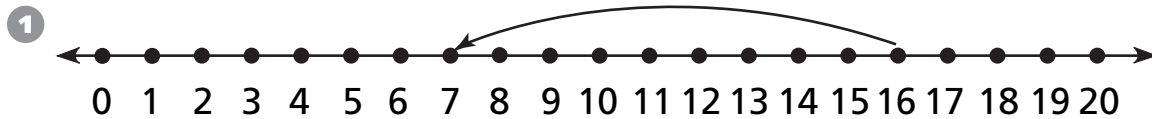


Number and Operations

Write the subtraction sentence shown on the number line.



Reasoning and Proof

Use the clues to find the mystery number.

④ The number is greater than 35 but less than 45.
 The sum of the digits is an odd number.
 The number is a multiple of 6. _____

⑤ The number is greater than 60 but less than 75.
 The sum of the digits is 9.
 The number is an even number. _____

⑥ The number is a two-digit number.
 The number is a multiple of 5.
 The ones digit and tens digit are the same number. _____

⑦ The number is greater than 80 but less than 100.
 The sum of the digits is 12.
 The number is an odd number. _____