

Algebra

Shade squares to make a pattern on each section of the Number Line Hotel. Then describe your pattern.

1

80	81	82	83	84	85	86	87	88	89
70	71	72	73	74	75	76	77	78	79
60	61	62	63	64	65	66	67	68	69

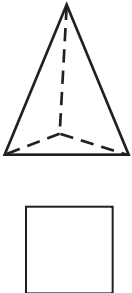
2

30	31	32	33	34	35	36	37	38	39
20	21	22	23	24	25	26	27	28	29
10	11	12	13	14	15	16	17	18	19

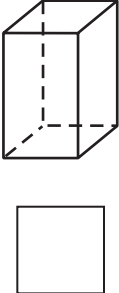
Geometry

Write the number of vertices for each figure. (Some of the figures might have no vertices.)


3



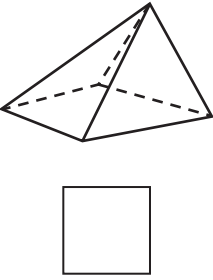
4



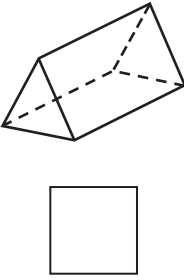
5



6



7



8

