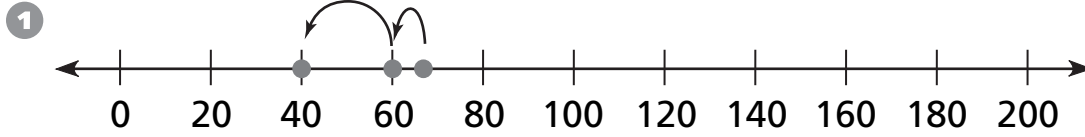
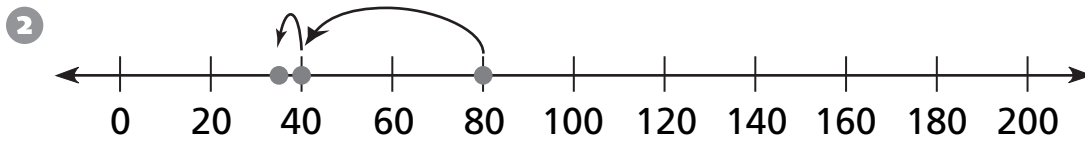


### Number and Operations

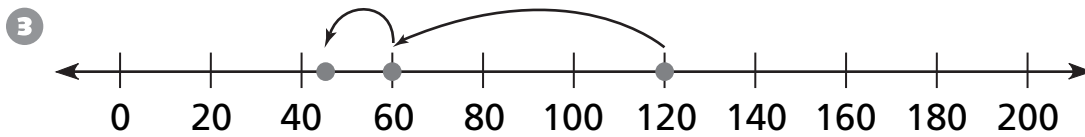
Complete the subtraction sentence for each set of jumps on the number line.



$68 - 8 = \underline{\quad}, 60 - 20 = \underline{\quad}, \text{ so } 68 - 28 = \underline{\quad}$



$80 - 40 = \underline{\quad}, 40 - 3 = \underline{\quad}, \text{ so } 80 - 43 = \underline{\quad}$



$120 - 60 = \underline{\quad}, 60 - 15 = \underline{\quad}, \text{ so } 120 - 75 = \underline{\quad}$

### Geometry

For 4 to 8, use the grid. Write the location of each figure using a letter and a number.

- ④ Square \_\_\_\_\_
- ⑤ Circle \_\_\_\_\_
- ⑥ Triangle \_\_\_\_\_
- ⑦ Rectangle \_\_\_\_\_
- ⑧ Parallelogram \_\_\_\_\_

