

### Number and Operations

**Round each number to the nearest ten.**





① 76 _____	② 128 _____	③ 445 _____	④ 789 _____
⑤ 618 _____	⑥ 271 _____	⑦ 903 _____	⑧ 12 _____

**Round each number to the nearest hundred.**

⑨ 168 _____	⑩ 92 _____	⑪ 613 _____	⑫ 210 _____
⑬ 774 _____	⑭ 118 _____	⑮ 923 _____	⑯ 59 _____

### Data Analysis and Probability

**Use the pictograph to answer questions 17 to 19.**

LETTERS STUDENTS WROTE TO PEN PALS	
Jonah	
Stacey	
Jamal	
Ann	

**Key:** Each  = 2 letters.

- ⑰ Who wrote twice as many letters as Jamal? \_\_\_\_\_
- ⑱ How many more letters did Jamal write than Ann? \_\_\_\_\_
- ⑲ How many letters did the four students write in all? \_\_\_\_\_