

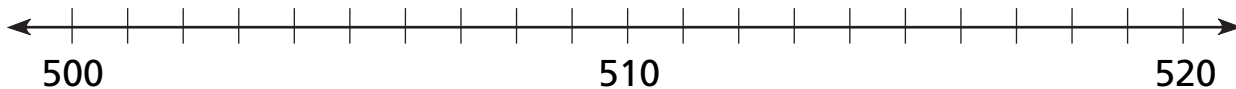
Number and Operations

Write the numbers in the correct places on the number line.

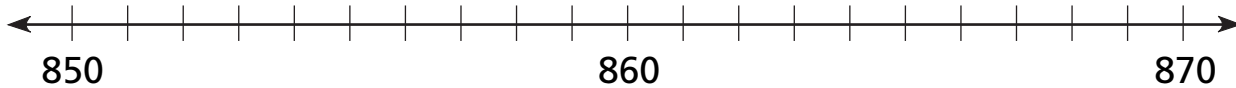
- ① 347, 346, 339



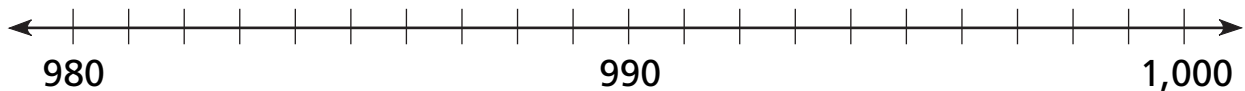
- ② 509, 515, 511



- ③ 867, 852, 859



- ④ 998, 991, 986

**Data Analysis and Probability**

List all possible outcomes for the experiment.

- ⑤ Toss a number cube labeled 1 to 6. _____
- ⑥ Put cards numbered 1 to 4 into a bag. Pick two cards without looking. _____
- ⑦ Spin a spinner with sections 1 to 4 and A to D. _____