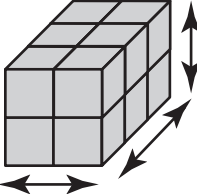
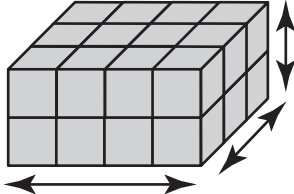
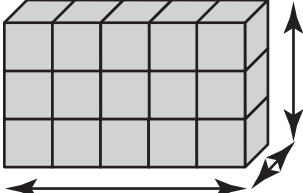


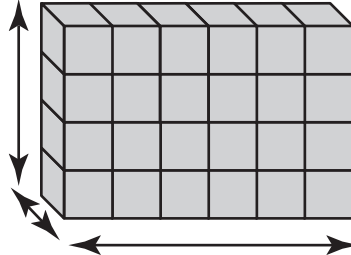
Measurement

The boxes shown below were built with centimeter cubes. Fill in the measurements and the volume for each box.

1  _____ cm
 _____ cm
 _____ cm
 volume: _____ cubic cm

2  _____ cm
 _____ cm
 _____ cm
 volume: _____ cubic cm

3  _____ cm
 _____ cm
 _____ cm
 volume: _____ cubic cm

4  _____ cm
 _____ cm
 _____ cm
 volume: _____ cubic cm

Problem Solving

Use a strategy and solve.

5 The cycle shop has some bicycles and some tricycles. There are 30 wheels in all. How many bicycles and tricycles can there be?

6 Trace the two triangles. Then cut them out. How many different 4-sided figures can you make using both triangles?

