








Measurement

Measure the line segment with an inch ruler. Write the length to the nearest quarter inch.

1		_____
2		_____
3		_____
4		_____
5		_____
6		_____
7		_____


Data Analysis and Probability

List all possible outcomes for the experiment.

8 Toss the cup in the air, and let it fall to the ground.



9 Spin the spinner once.



10 Toss a penny in the air, and let it fall to the ground.
