
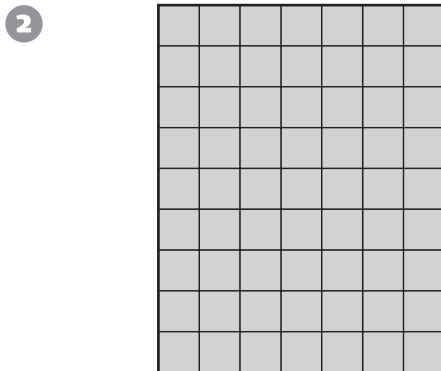




Number and Operations

Multiply to find the number of squares in the array.









Reasoning and Proof

Solve the mystery number puzzle.

- 5 The number is greater than 60 but less than 80.
You say the number when you start at 60 and count by fives. The sum of the digits is an even number. _____

- 6 The number is greater than 70 but less than 90.
The number is odd.
The sum of the digits is 9. _____