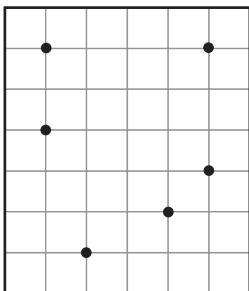


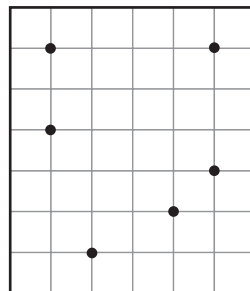
Geometry

Choose points to connect, and make the figure.

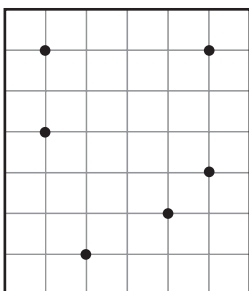
- 1 Choose at least 4 of the points, and connect them to make a polygon.



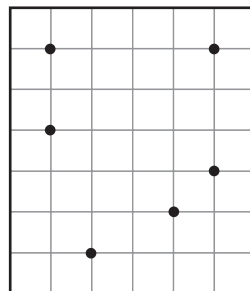
- 2 Connect the same points you chose for Problem 1 to make a figure that is **NOT** a polygon.



- 3 Connect 4 of the points to make a polygon with exactly 2 right angles.



- 4 Connect points to make a triangle with a right angle.



Measurement

Write the amount using the fewest coins.

5 82¢ _____

6 64¢ _____

7 49¢ _____

8 77¢ _____