


Number and Operations


Write a multiplication sentence for the big array.

1



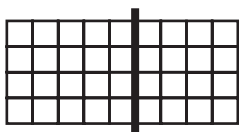
$$(5 \times 7) + (3 \times 7) =$$

2



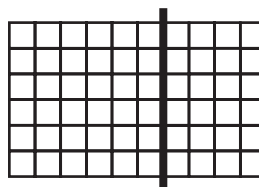
$$(3 \times 10) + (4 \times 10) =$$

3



$$(4 \times 5) + (4 \times 4) =$$

4



$$(6 \times 6) + (6 \times 4) =$$

Data Analysis and Probability

For 5 to 7, use the line graph. It shows how many push-ups Jeanine did in school each day for a week.

5 On which day did Jeanine do 8 push-ups?

6 On which 3 days did she do 20 push-ups altogether?

7 How many more push-ups did she do on Thursday than on Monday?

