
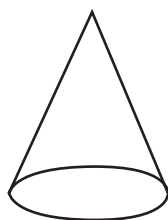


Geometry

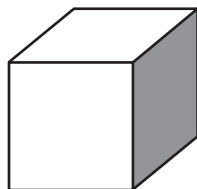
Write the letter of the figure that fits the description.
There might be more than one correct answer.



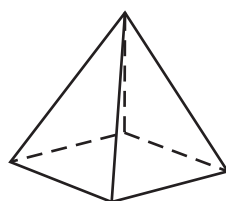
A



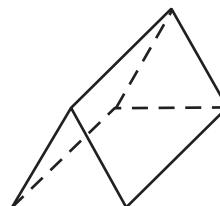
B



C



D



E

- 1 The figure has faces that are triangles. _____
- 2 The figure will roll on the floor. _____
- 3 The figure has faces that are rectangles. _____
- 4 The figure has no edges. _____
- 5 The figure has 6 faces. _____
- 6 The figure has only faces that are rectangles. _____

Problem Solving

Use a strategy and solve.

- 7 Scott graduated from high school in 2005. He was 18 years old at the time. In what year was Scott born? _____
- 8 Darcy is buying a snack from the machine. She has put in 3 dimes so far. The snack costs 55¢. How much more money does she need to put into the machine? _____
- 9 Bob's Bookstore gets 3 cartons of 20 books. They put 38 books on the shelves. Of those, 10 are sold, and Bob gives 8 away as gifts. How many of the books are still in the store? _____