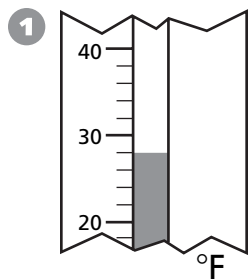
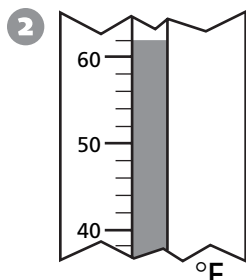


Measurement

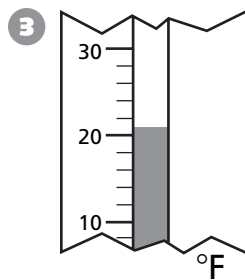
Write the temperature shown on the thermometer.



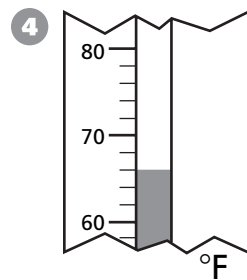
_____ °F



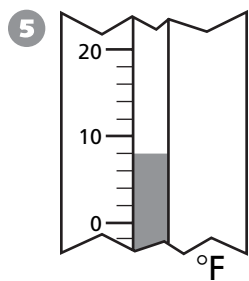
_____ °F



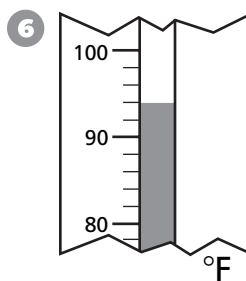
_____ °F



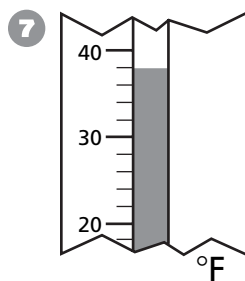
_____ °F



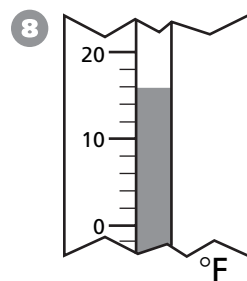
_____ °F



_____ °F



_____ °F



_____ °F

Reasoning and Proof

For 9 to 11, use the price chart.

9 What is the cost of one pen and one pencil?

10 If you spend 27¢, what have you bought?

11 If you add another column and row to the chart, what would you write for the cost of 5 pens and 5 pencils?

Pens

	0	1	2	3	4
0	0	4¢	8¢	12¢	16¢
1	5¢	9¢	13¢	17¢	21¢
2	10¢	14¢	18¢	22¢	26¢
3	15¢	19¢	23¢	27¢	31¢
4	20¢	24¢	28¢	32¢	36¢

Pencils