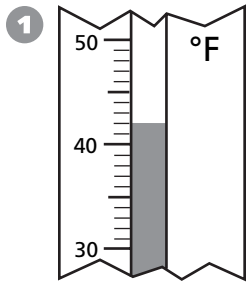
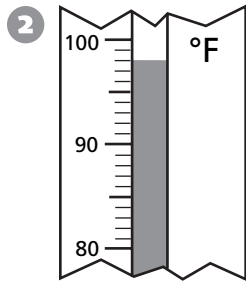


**Measurement**

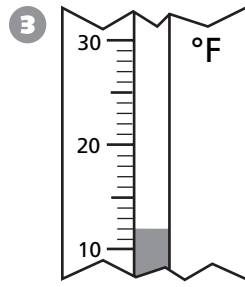
**Write the temperature shown on the thermometer.**



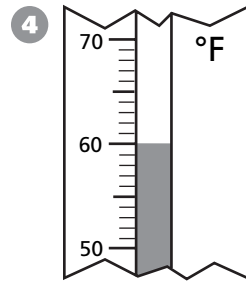
\_\_\_\_\_



\_\_\_\_\_



\_\_\_\_\_



\_\_\_\_\_

**Write the difference between the high and low temperatures.**

5 high temperature:  $71^{\circ}\text{F}$ , low temperature:  $39^{\circ}\text{F}$  \_\_\_\_\_

6 high temperature:  $50^{\circ}\text{F}$ , low temperature:  $21^{\circ}\text{F}$  \_\_\_\_\_

7 high temperature:  $14^{\circ}\text{F}$ , low temperature:  $9^{\circ}\text{F}$  \_\_\_\_\_

8 high temperature:  $102^{\circ}\text{F}$ , low temperature:  $77^{\circ}\text{F}$  \_\_\_\_\_

9 high temperature:  $23^{\circ}\text{F}$ , low temperature:  $15^{\circ}\text{F}$  \_\_\_\_\_

**Problem Solving**

**Use a strategy and solve.**

10 Jolene is choosing an outfit from 2 pairs of jeans and 5 shirts. How many different outfits can she make? \_\_\_\_\_

11 Jerry visits his grandmother the same day each week. If he visits her on March 1, what is the greatest number of times he can visit during March? \_\_\_\_\_

12 How many different four-digit numbers can you make from the digits 2, 4, 5, and 9 if the thousands place must be 2? Each digit can be used only once in a number. \_\_\_\_\_