



For 1–2, write the number of squares in each array.

1

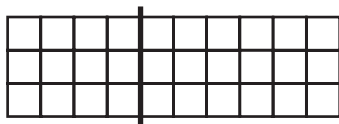


2




For 3–5, complete the multiplication sentence to match the array.

3



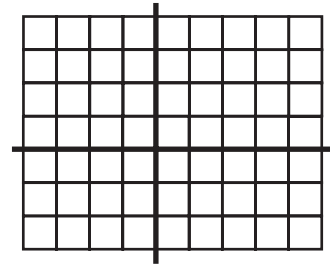
$(3 \times 4) + (3 \times 6) = \underline{\hspace{2cm}}$

4



$(4 \times 8) + (2 \times 8) = \underline{\hspace{2cm}}$

5




$(4 \times 4) + (4 \times 5) + (3 \times 4) + (3 \times 5) =$

6


An apartment building has 36 apartments. Each apartment has 9 windows. How many windows are there in all?

For 7–8, write the set of numbers you can use to write the fact family for the array.

7

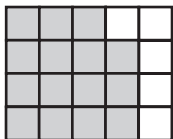


8




For 9–10, write the division sentence that matches the array.

9



10



For 11–12, write a number sentence that checks the division.

11
$$\begin{array}{r} 3 \text{ r}5 \\ 6 \overline{)23} \end{array}$$

12
$$\begin{array}{r} 8 \text{ r}4 \\ 7 \overline{)60} \end{array}$$

13 The gas tank in Mr. Kennedy’s car holds 18 gallons of gas. The car can travel 26 miles on one gallon of gas. How many miles can the car travel if the gas tank is full?
