



Adding Array Sections

Write the multiplication sentence shown by each part of the array. Find the sum of all the parts to find the total number of squares in the array.


1



2



3



4

