

Incorrect Shipments?


The Eraser Store now packs erasers by tens. The shipments below are described using pictures.


For 1–6:

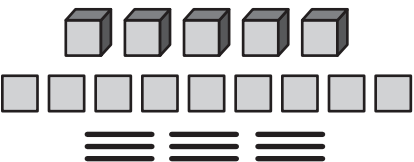
- A** Write the number of erasers in the shipment.
- B** Then decide whether the shipment is packed using the least number of containers. If it is, write yes. If it is not, write how the shipment should be repacked to use the least number of containers.


1  A _____ erasers B _____

2  A _____ erasers B _____

3  A _____ erasers B _____

4  A _____ erasers B _____

5  A _____ erasers B _____

6  A _____ erasers B _____