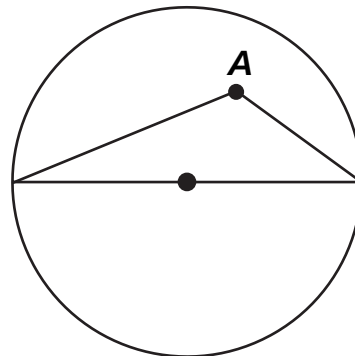


# Classifying Angles

- 1 Mark a point inside of the circle.

Connect your point to both ends of the line going through the center of the circle.

Mark another point inside the circle, and connect it to the ends of the line.



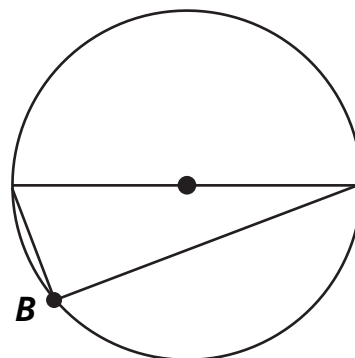
What kind of angles (acute, right, or obtuse) have you made?

\_\_\_\_\_

- 2 Mark a point on the edge of the circle.

Connect your point to both ends of the line going through the center of the circle.

Repeat with other points.



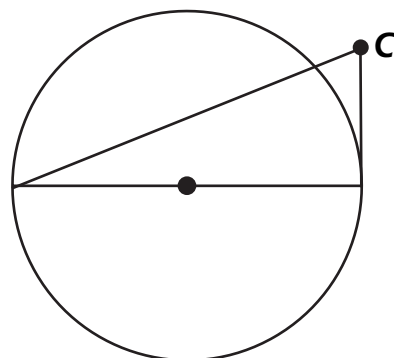
What do you notice about all of the angles you made?

\_\_\_\_\_

- 3 Mark a point outside of the circle.

Connect your point to both ends of the line going through the center of the circle.

Repeat with other points.



What do you notice about all of the angles you made?

\_\_\_\_\_