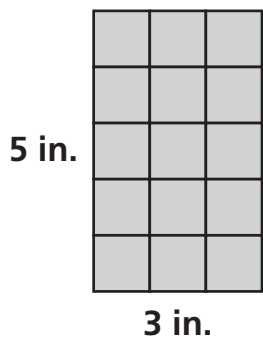


Introducing Standard Units for Measuring Area

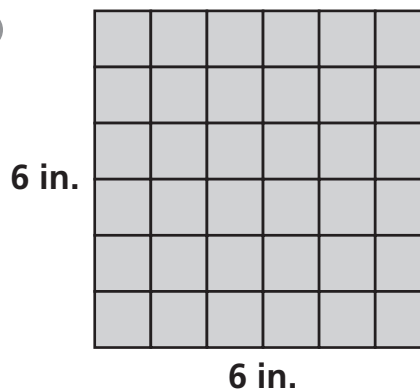
Find each area in the units named.

1



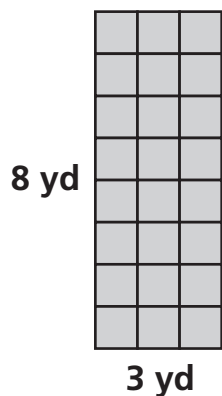
Area = _____ square inches

2



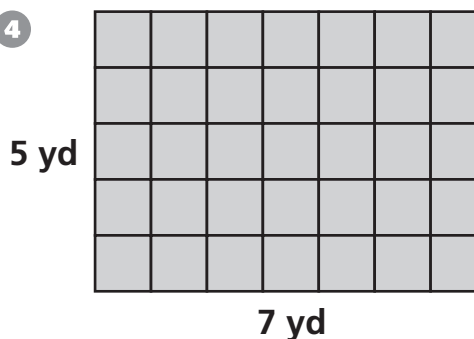
Area = _____ square inches

3




Area = _____ square feet

4




Area = _____ square feet

5 Each square is 1 ft by 1 ft.



Area = _____ square inches

6 Each square is 12 ft by 12 ft.



Area = _____ square feet