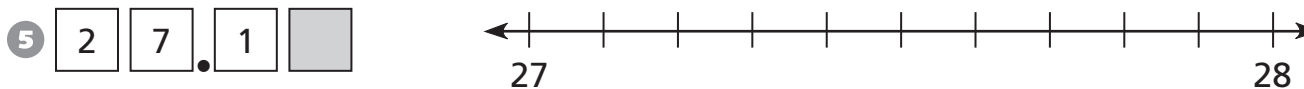
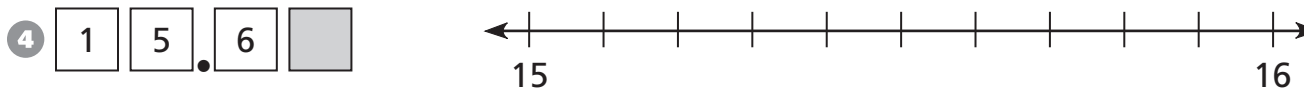
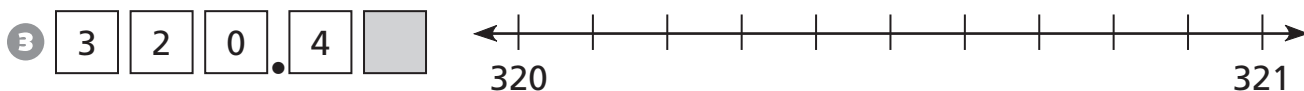
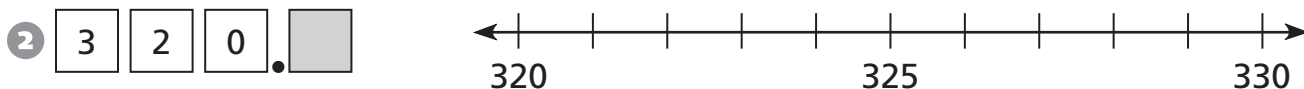
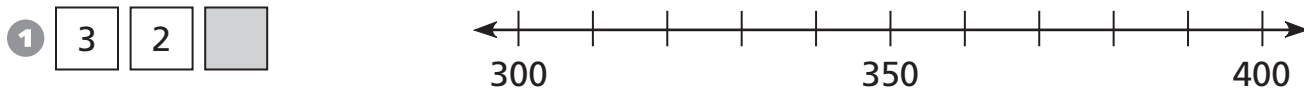


Introducing Decimals

Shade part of each number line to show where the number must be.



Continue the pattern.

⑥ 1, 2, 4, 8, _____, _____, _____

⑦ 8, 4, 2, 1, $\frac{1}{2}$, _____, _____

⑧ 1, 10, 100, _____, _____, _____

⑨ 1,000, 100, 10, _____, _____