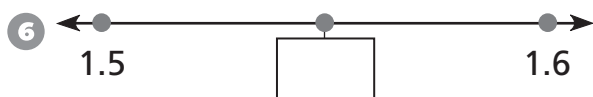
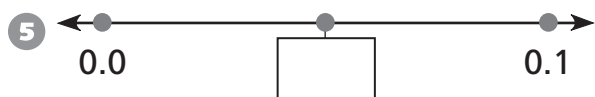
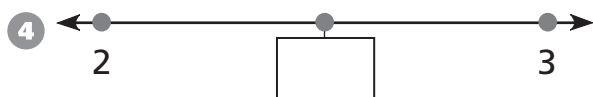
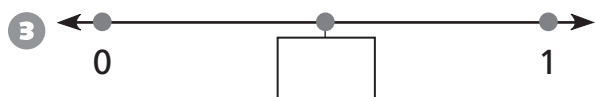
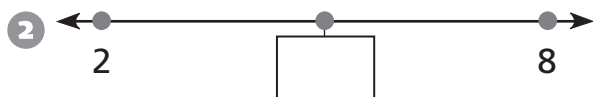
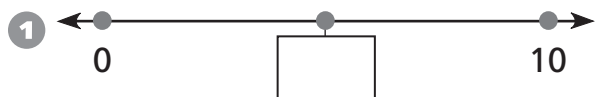


# Zooming in on the Number Line

Write the number that is halfway between the two numbers.



7 Circle the smaller number in each pair.

3.7                      3.09

4.10                      4.03

7.99                      8.00

6.05                      6.3