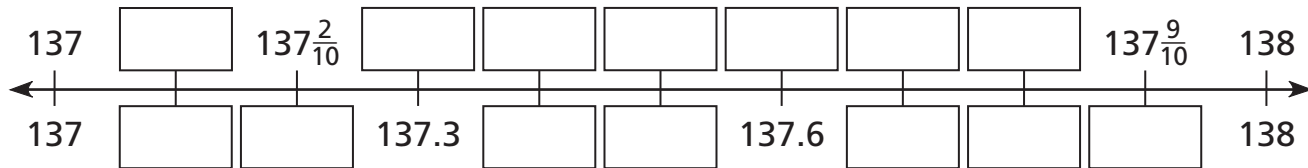


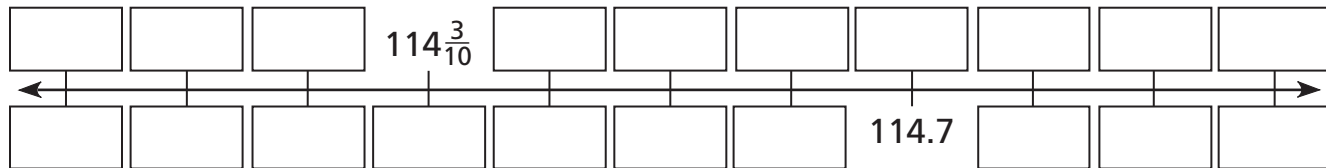
# Connecting Fractions and Decimals

**Label these number lines using fractions and decimals.**

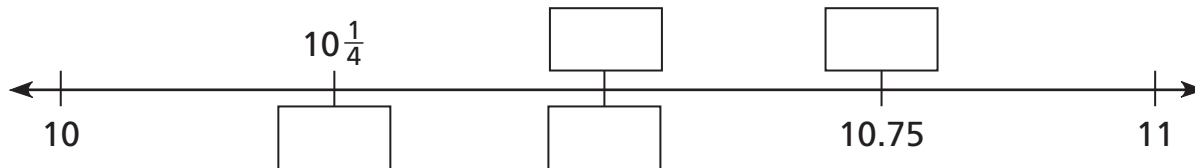
**1**



**2**



**3**



**Find the total amount in dollars and cents.**

**4**  $\$1.63 + \frac{1}{4}$  of a dollar =

**5**  $\frac{1}{2}$  of a dollar +  $\frac{1}{4}$  of a dollar +  $\$1.00$  =

**6**  $\frac{3}{10}$  of a dollar +  $\$2.19$  =