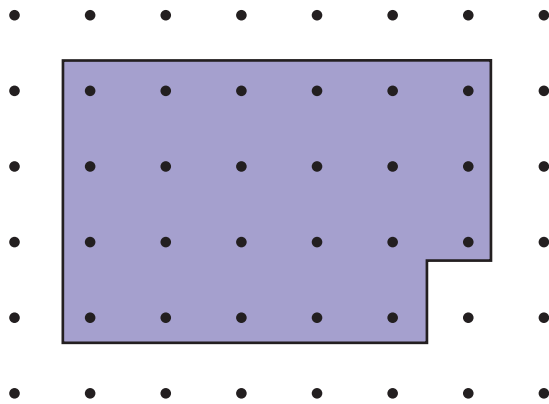


Estimating Area in Standard Units

NCTM Standards 1, 2, 6, 7, 8, 9, 10

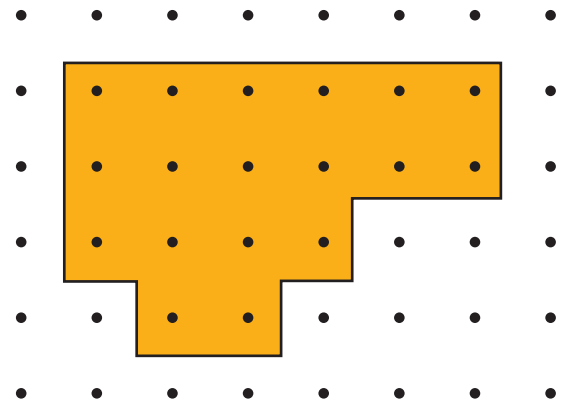
Estimate the area of each figure in square centimeters.

1



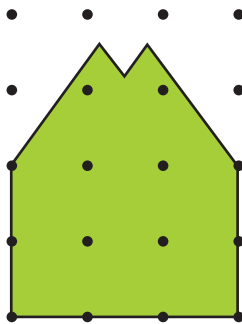
Area: about _____ square cm

2



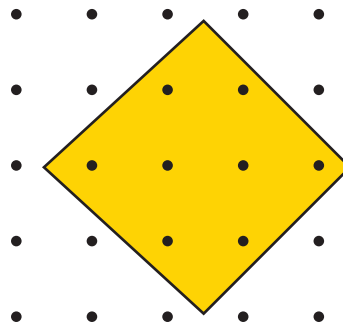
Area: about _____ square cm

3



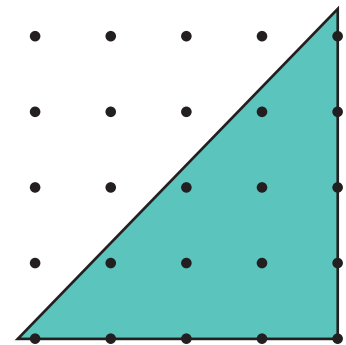
Area: about
_____ square cm

4




Area: about
_____ square cm

5



Area: about
_____ square cm




= 1 square inch



= 1 square centimeter

Estimate the area of each figure in square inches and in square centimeters.

6



Area: about _____ square inches

Area: about _____ square cm


7



Area: about _____ square inches

Area: about _____ square cm

8



Area: about _____ square inches

Area: about _____ square cm



9 Challenge How could you use a ruler to help you estimate the area of a figure?
