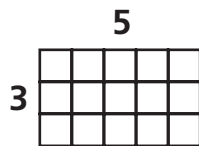


# Introducing Perimeter

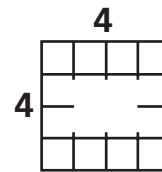
NCTM Standards 1, 2, 6, 7, 8, 9, 10

1



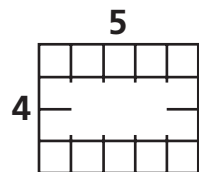
length	5	area	
width	3	perimeter	16

2



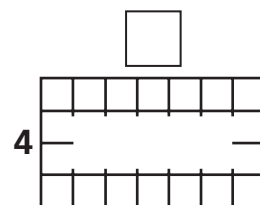
length	4	area	
width	4	perimeter	

3



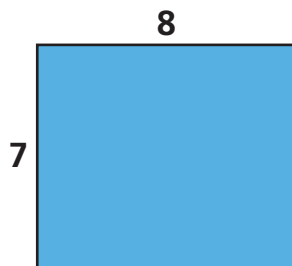
length	5	area	
width	4	perimeter	

4



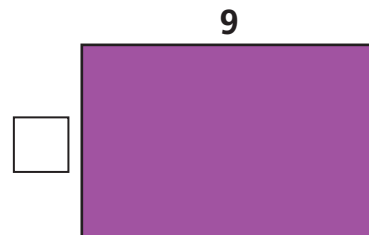
length		area	28
width	4	perimeter	

5



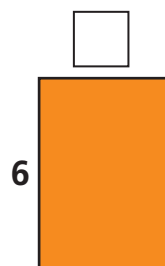
length	8	area	
width	7	perimeter	

6



length	9	area	54
width		perimeter	

7



length		area	24
width	6	perimeter	


8



length	8	area	24
width		perimeter	22


**Measure to find the length, width, and perimeter of the rectangle.**

9



length	inches
width	inches
perimeter	inches

10



length	centimeters
width	centimeters
perimeter	centimeters

11



length	centimeters
width	centimeters
perimeter	centimeters



**12 Challenge** Find the areas of the rectangles on this page. Include the units in your answers.

9	
10	
11	