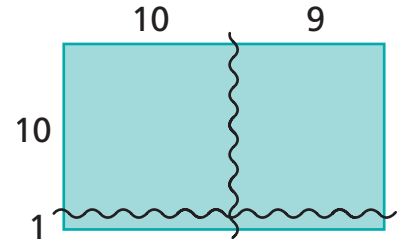
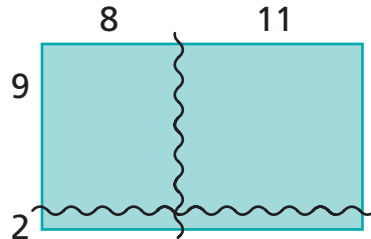
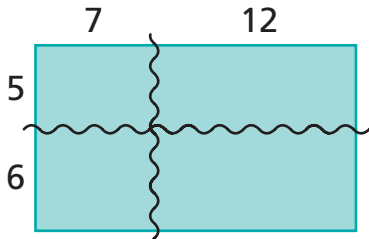


Choosing Simpler Problems

NCTM Standards 1, 2, 6, 7, 8, 9, 10

Solve the multiplication problems.

$$19 \times 11 = \boxed{}$$



1	×	7	12	19
5		35		
6				
11				

2	×	8	11	19
9				
2				
11				

3	×	10	9	19
10				
1				

$$17 \times 16 = \boxed{}$$

4	×	11	6	17
8				

5	×	10	7	
6				
16				

6	×	9	8	
9				
7				

7

$16 \times 16 = \square$

×			16
16			

8

$13 \times 19 = \square$

×			

9

$14 \times 17 = \square$

×			

10

$17 \times 18 = \square$

×			

11 Challenge Explain why you decided to fill in the chart in Problem 10 the way you did.
