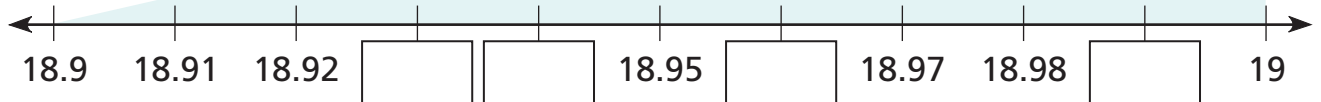
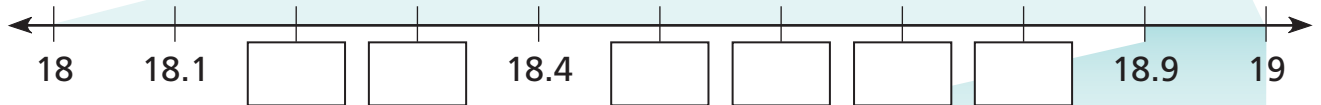
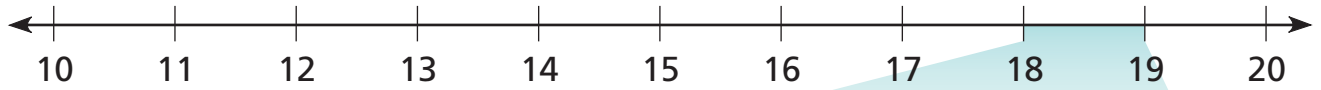


# Zooming in on the Number Line

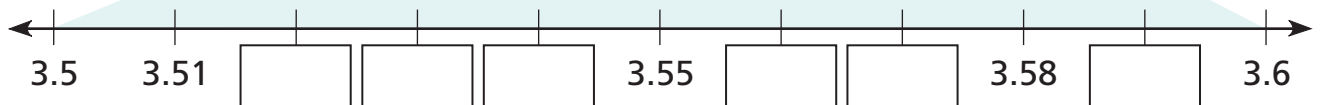
NCTM Standards 1, 2, 6, 7, 8, 9, 10

Fill in the missing numbers.

1



2





3 Use a calculator to multiply these numbers between 6.5 and 6.6.

Numbers between 6.5 and 6.6	Numbers multiplied by themselves
6.5	
6.51	
6.52	
6.6	

Paul multiplied a number by itself and got 43. His number must be between two numbers in the left column.

His number must be between \_\_\_\_\_ and \_\_\_\_\_.  
How do you know?

---

---

4 **Challenge** Name three numbers between 3.65 and 3.66.

<input type="text"/>	<input type="text"/>	<input type="text"/>
----------------------	----------------------	----------------------