

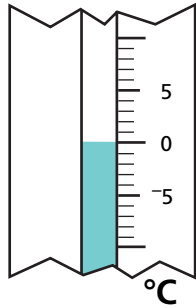
Introducing Negative Numbers

NCTM Standards 1, 4, 6, 7, 8, 9, 10

Brrr! It's very cold this week. Every day at 6 A.M. Nina went outside and measured the temperature. Here's the information that she recorded. Fill in the missing information.

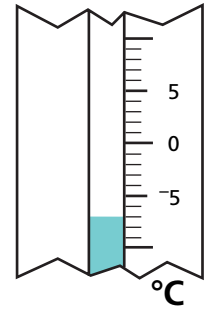
1

Monday

_____ 0°C 

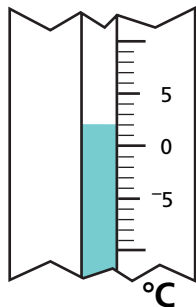
2

Tuesday

Change from Monday _____ 7° lower

3

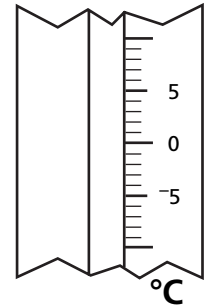
Wednesday



Change from Tuesday _____

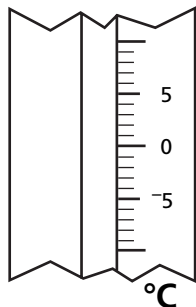
4

Thursday

Change from Wednesday _____ 6° higher

5

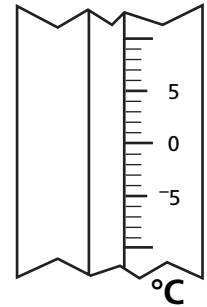
Friday

_____ -3°C 

Change from Thursday _____

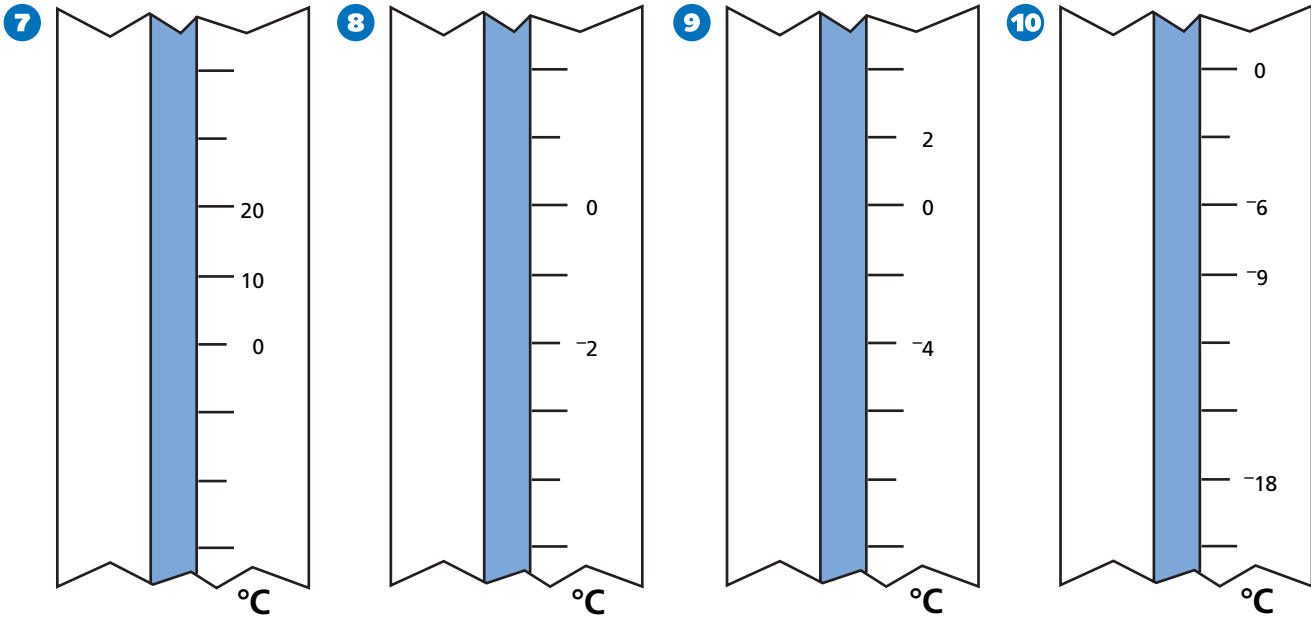
6

Saturday

_____ -8°C 

Change from Friday _____

Fill in the missing temperatures on each thermometer.



11 The lowest temperature this March was 5° Celsius.

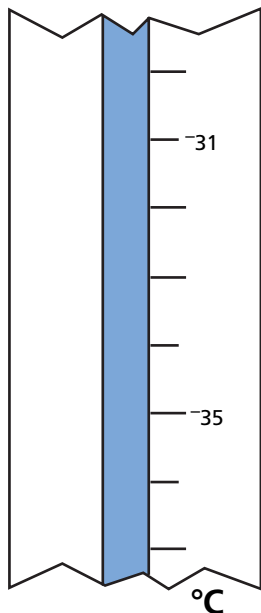
In June, the lowest temperature was 13°C warmer than in March.

In January, the lowest temperature was 30°C colder than in June.

What was the lowest temperature in January? _____



12 Challenge



13 Challenge

