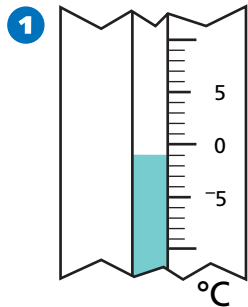


Review/Assessment

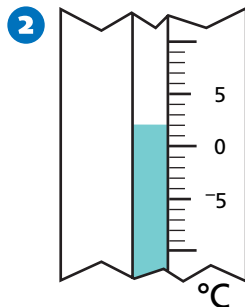
NCTM Standards 1, 2, 6, 7, 8, 9, 10

Every day at 6 A.M., Ming went outside and measured the temperature. Here's the information that she recorded. Fill in the missing information. [Lesson 1](#)



Monday

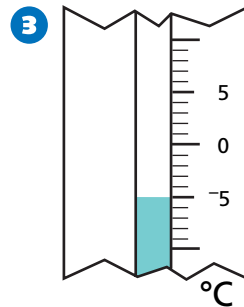
_____°C



Tuesday

Change from Monday

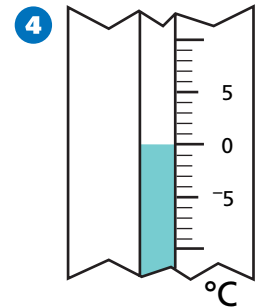
3° higher



Wednesday

-5°C

Change from Tuesday



Thursday

Change from Wednesday

5° higher

Use this number line to help answer the questions below. [Lesson 2](#)



5 Start at -5. Jump backward 6 spaces. Then jump forward 3 spaces.

Where are you? _____

6 Start at 10. Jump backward 8 spaces. Then jump backward 5 spaces.

Where are you? _____

7 Start at 3. Jump forward 3 spaces. Then jump backward 7 spaces.

Where are you? _____

8 Start at -8. Jump forward 10 spaces. Then jump backward 6 spaces.

Where are you? _____

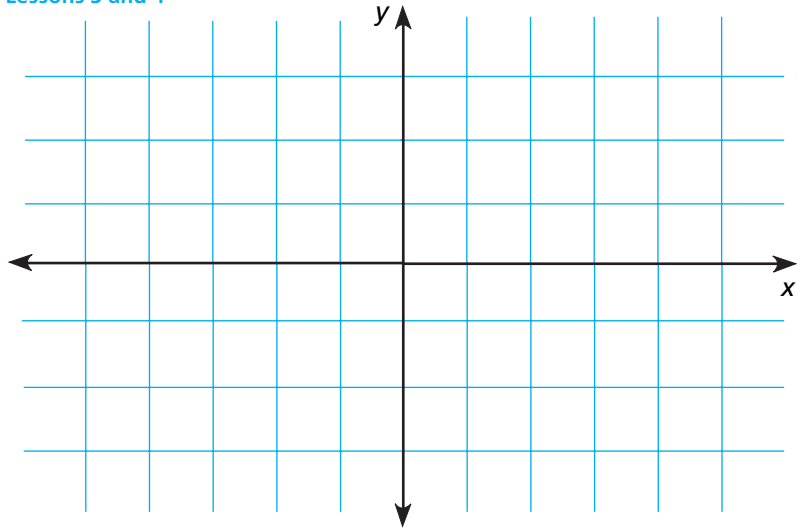
9 Mark A at $(0,2)$ Draw \overline{AC} Lessons 3 and 4

10 Mark B at $(2,0)$ Draw \overline{AD}

11 Mark C at $(2,-2)$ Draw \overline{BD}

12 Mark D at $(-2,-2)$ Draw \overline{CE}

13 Mark E at $(-2,0)$ Draw \overline{BE}



What figure did you draw?

14 Write the directions for drawing the figure below.
Tell which point to mark and which connecting lines to draw. Lesson 5

