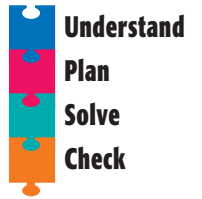



# Problem Solving Strategy

## Act It Out


NCTM Standards 1, 2, 4, 6, 7, 8, 9, 10




- 1 Xavier has several 3¢ stamps and 7¢ stamps in his desk drawer. He has weighed several letters and knows what postage each one needs. Can he use only the stamps he already has and put the exact postage on each letter?




27¢



11¢



30¢



37¢

- 2 Sally is taller than Jake and Laura. Miguel is taller than Jake but shorter than Laura. Selby is shorter than Jake. Robert is taller than Sally. Put these six students in order from shortest to tallest.

, , , , ,