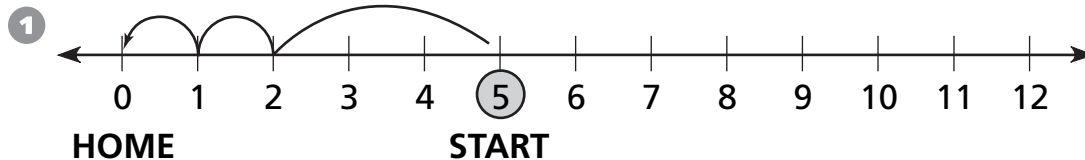
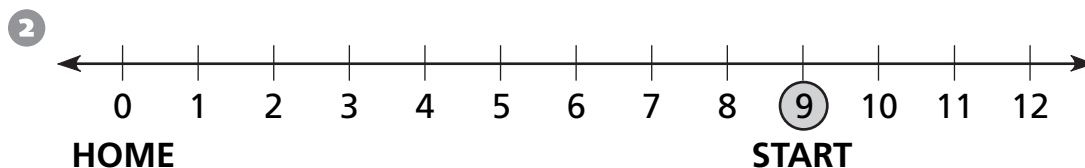


# Arrays with Leftovers

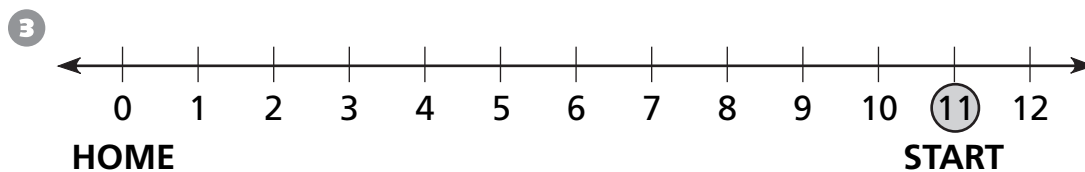
All jumps must be either 3 spaces long or 1 space long.  
Show how to get home in the fewest jumps possible.



jump of 3,  jumps of 1



jumps of 3,  jumps of 1



jumps of 3,  jumps of 1



## Test Prep

- 4** Sue drove from Hartford to Boston in 4 hours and 15 minutes. She left at 11:20 A.M. What time did she arrive in Boston?

A. 2:35 P.M.      C. 3:55 P.M.  
B. 3:35 P.M.      D. 4:35 P.M.

- 5** Which of the following is not in the fact family for 2, 8, and 16?

A.  $8 \times 2 = 16$   
B.  $16 \div 2 = 8$   
C.  $8 \div 2 = 4$   
D.  $2 \times 8 = 16$