












Combining and Reducing Eraser Shipments

| | | |
|--|--|--|
|   |   |   |
| <p>7 erasers to a pack (7 erasers total)</p> | <p>7 packs to a box (49 erasers total)</p> | <p>7 boxes to a crate (343 erasers total)</p> |

Circle the number that is the best estimate for each amount of erasers.

| | | | | |
|---|--------------------|------|------|------|
| 1 | 2 boxes of erasers | 75 | 100 | 125 |
| 2 | 2 crates | 700 | 750 | 800 |
| 3 | 4 crates | 1000 | 1200 | 1400 |
| 4 | 1 box and 1 crate | 360 | 400 | 420 |

Use estimation to fill in the blanks.

- 5 A customer ordered 428 erasers. The shipment contained _____ full .
- 6 A customer ordered 106 erasers. The shipment contained _____ full .
- 7 A customer ordered 43 erasers. The shipment contained _____ full .
- 8 A customer ordered 312 erasers. The shipment contained _____ full .
- 9 A customer ordered 214 erasers. The shipment contained _____ full .



Test Prep

10 There are 4 quarts in 1 gallon. How many quarts are there in 5 gallons? Tell how you know.
