



Sharing Shipments



Complete the orders.

Remember that there are **10** erasers in a pack,
10 packs in a box, and **10** boxes in a crate.



1

		—	•
1,	8,	0,	3
—	0,	4,	9,
6			
/ / / /			



2

		—	•
0,	0,	9,	2
+	1,	8,	0,
9			
/ / / /			



3

		—	•
1,	3,	5,	5
×			
6			
/ / / /			



4

		—	•
/ / / /			
3	0,	9,	3,
	6		
/ / / /			

5

		—	•
0,	8,	2,	4
×			
5			
/ / / /			

6

		—	•
/ / / /			
2	1,	□,	2,
	8,		
/ / / /			



Test Prep

7 Maple Park Elementary School had a jump rope contest. Peter jumped 296 times. Selene jumped 407 times. What is the best estimate of how many more times Selene jumped than Peter?

- A. 200
- B. 250
- C. 150
- D. 100