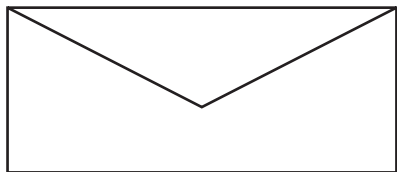


Introducing Perpendicular and Parallel Lines

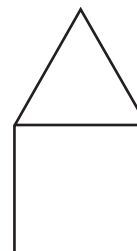
How many pairs of parallel lines are in these pictures?

1



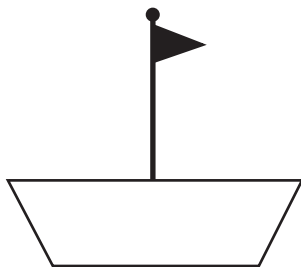
_____ pair(s) of parallel lines

2



_____ pair(s) of parallel lines

3



_____ pair(s) of parallel lines

4

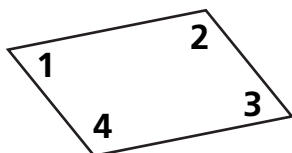


_____ pair(s) of parallel lines



Test Prep

5 Which angles are obtuse?



- A. Angles 1 and 2
- B. Angles 1 and 3
- C. Angles 1 and 4
- D. Angles 2 and 4

6 Enrique has 18 markers. He gives 5 of them to Kevin so that they each have the same number. How many markers do they have in all?

- A. 36
- B. 26
- C. 18
- D. 13