

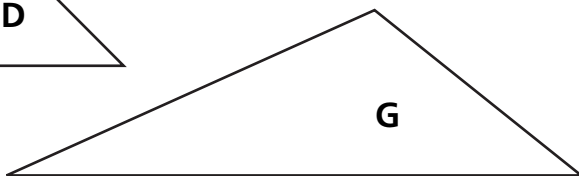
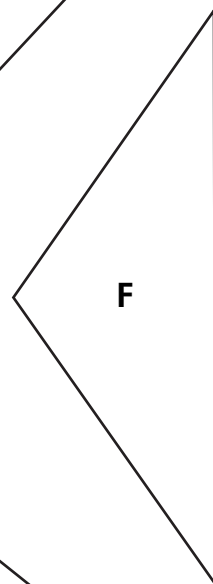
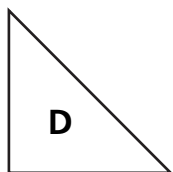
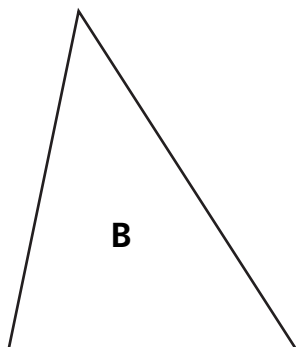
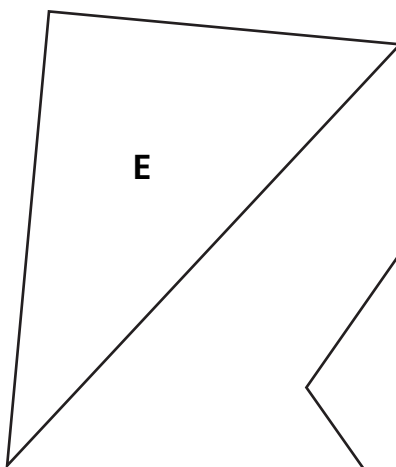
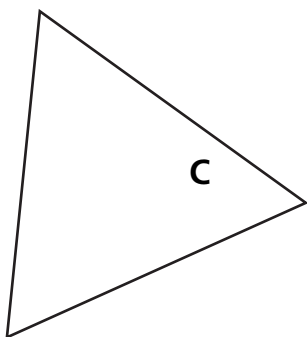
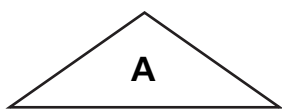
# Symmetry in Triangles and Quadrilaterals

Classify the triangles by their lines of symmetry.

0 lines of symmetry: \_\_\_\_\_

1 line of symmetry: \_\_\_\_\_

3 lines of symmetry: \_\_\_\_\_



## Test Prep

- 1 Johanna started to play a video game at 4:45 P.M. When she finished playing, her watch showed this time:



How long did she play? Explain.

\_\_\_\_\_

\_\_\_\_\_

\_\_\_\_\_