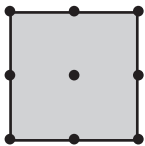
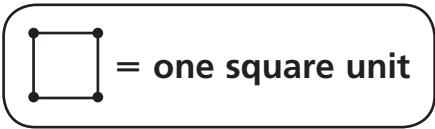
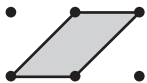


# Introducing Area

Find the area of each figure.



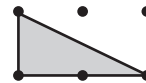
Area:



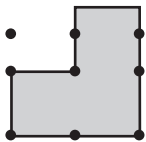
Area:



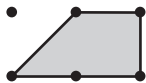
Area:



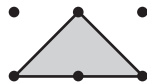
Area:



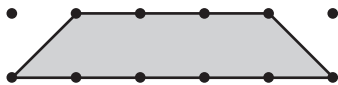
Area:



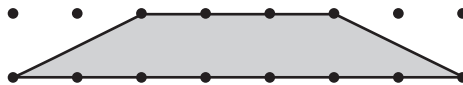
Area:



Area:



Area:

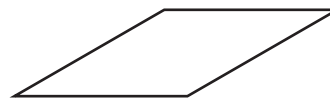


Area:



## Test Prep

- How many lines of symmetry does this figure appear to have? Explain how you found your answer.




---



---



---



---