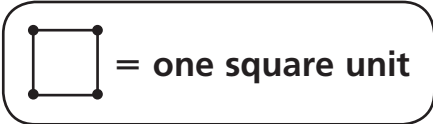




Using Known Areas to Find Unknown Areas




- 1 Each of these triangles has an area of _____ square units.
Draw 2 or 3 other triangles with the same area.



- 2 The area of the triangle below is _____ square units.
Draw some other triangles with the same area.



- 3 The area of the triangle below is _____ square units.
Draw some other triangles with the same area.



Test Prep

- 4 How many minutes are in 5 hours 38 minutes? Explain.
