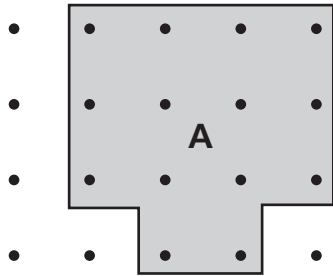
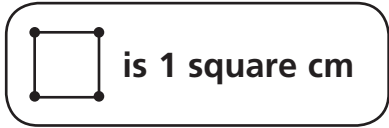
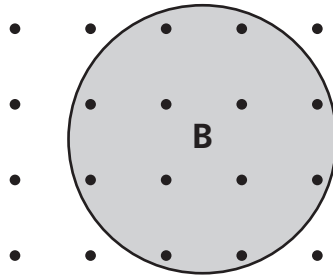


Estimating Area in Standard Units

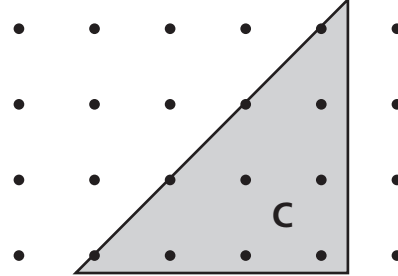
1 Estimate the area of each figure in square centimeters.



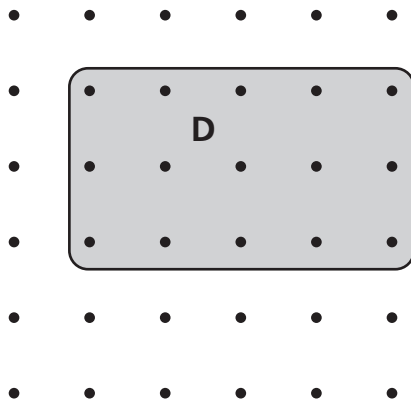
Area: about _____ square cm



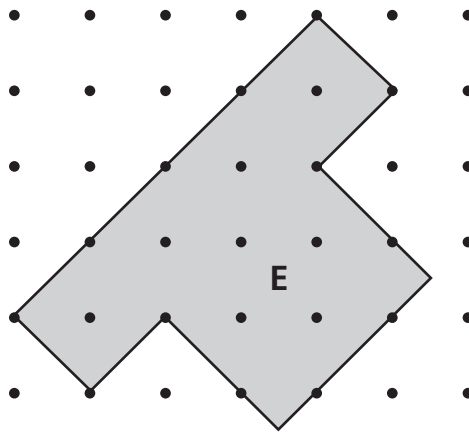
Area: about _____ square cm



Area: about _____ square cm



Area: about _____ square cm



Area: about _____ square cm



Test Prep

2 Sherry's basketball team has a 40-minute practice every other day. How many hours does the team practice in 12 days? Explain.
