
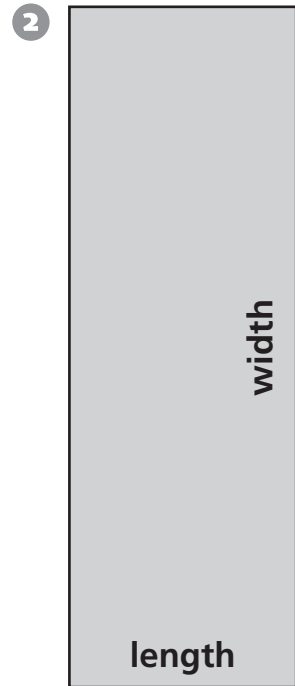
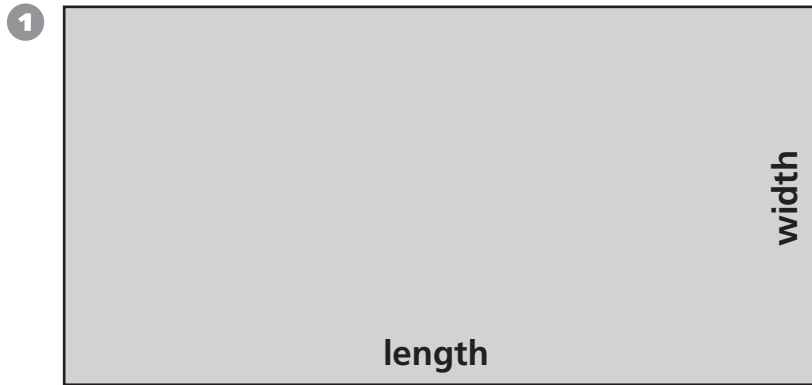


# Introducing Perimeter

Measure the length and width of each rectangle.  
Then find the perimeter.



Rectangle	Length	Width	Perimeter
1	cm	cm	cm
2	cm	cm	cm
3	cm	cm	cm



## Test Prep

4 Maya made a quilt with pieces like this one. Measure the length and width of the piece to the nearest centimeter. What is the perimeter of the piece?

- A. 9 cm
- B. 10 cm
- C. 18 cm
- D. 20 cm

