

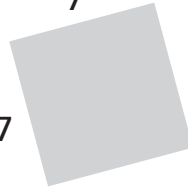



# Connecting Perimeter and Area

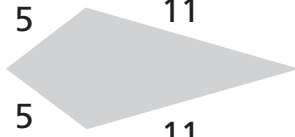
Find the perimeter of each quadrilateral.


①   
rectangle  
\_\_\_\_\_ units

②   
parallelogram  
\_\_\_\_\_ units

③   
square  
\_\_\_\_\_ units

④   
rhombus  
\_\_\_\_\_ units

⑤   
quadrilateral  
\_\_\_\_\_ units

⑥   
trapezoid  
\_\_\_\_\_ units

- ⑦ List the figures with two pairs of parallel sides. 1 \_\_\_\_\_
- ⑧ Which figure has exactly one pair of parallel sides? \_\_\_\_\_
- ⑨ List the figures with four equal sides. \_\_\_\_\_
- ⑩ List the figures with four right angles. \_\_\_\_\_
- ⑪ Which figure has four equal sides and four right angles? \_\_\_\_\_



## Test Prep

- ⑫ Describe a scalene triangle. \_\_\_\_\_
- ⑬ Describe an isosceles triangle. \_\_\_\_\_
- ⑭ Describe an equilateral triangle. \_\_\_\_\_