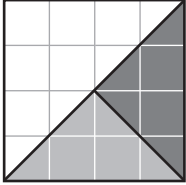









Exploring Fractions

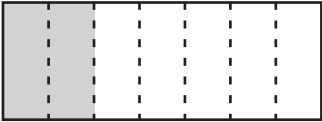
Write fractions that name the indicated portions of each picture.

1 

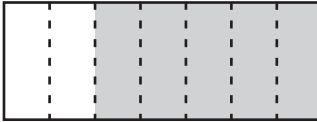
		
	$\frac{1}{2}$	

2 


		

3 


Shaded	
Unshaded	

4 

Shaded	
Unshaded	

5 

Shaded	
Unshaded	

6 

Shaded	
Unshaded	



Test Prep

7 Some children divided 18 marbles equally. Each child got more than 1 marble, and there were 4 left over. How many children were there? Explain.

