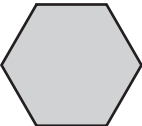
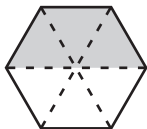


Exploring Fractions Greater than 1

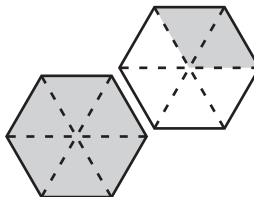
For the problems on this page,  is 1.

Find the fraction of a hexagon that's shaded.

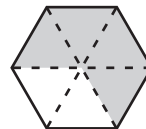
1



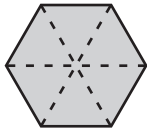
2



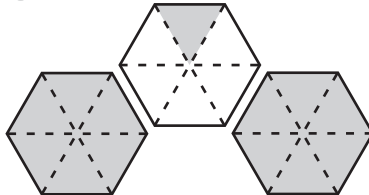
3



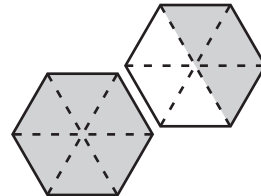
4



5




6





Test Prep

7 Which shape is exactly $\frac{1}{3}$ of the size of  ?



8 Sandra used a rule to make this list of numbers.

1, 2, 5, 10, 17, ■

What number comes next?

A. 20

C. 26

B. 24

D. 34