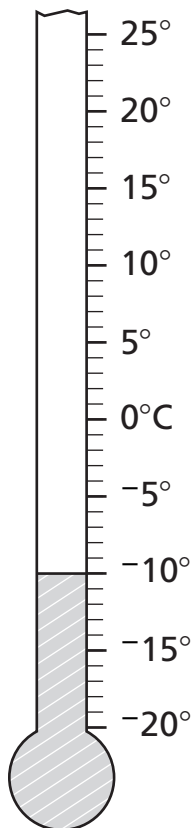


# Introducing Negative Numbers

Here are the daily low temperatures for one cold week. Fill in the table to show how the temperature changed from one day to the next.

1



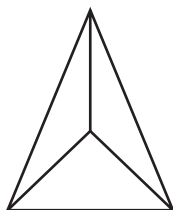
Day	Low Temperature	Change From Yesterday
Sunday	$-10^{\circ}\text{C}$	
Monday	$-16^{\circ}\text{C}$	6 degrees lower
Tuesday	$6^{\circ}\text{C}$	
Wednesday	$13^{\circ}\text{C}$	
Thursday		15 degrees lower
Friday		9 degrees lower
Saturday	$-19^{\circ}\text{C}$	



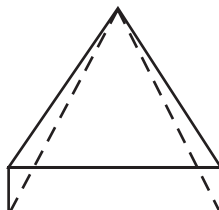
## Test Prep

2 Which of these figures has 5 faces and 5 vertices?

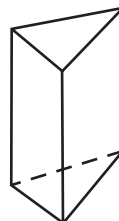
A.



B.



C.



D.

