

Number and Operations

Write multiplication and division fact families for each set of numbers.

1 7, 2, 14

2 8, 5, 40

3 5, 5, 25





4 9, 7, 63

5 3, 7, 21

6 6, 9, 54

Data Analysis and Probability

For 7–9, use the pictograph.

LETTERS WRITTEN TO PEN PALS BY FOURTH-GRADE STUDENTS	
Ms. Piper's class	
Mr. Powell's class	
Mr. Calhoun's class	
Mrs. Vernon's class	

7 Were there *more than* or *less than* 100 letters written in all?

8 How many more letters did Ms. Piper's class write than Mr. Powell's class?

Key: Each  = 5 letters.

9 Which two classes together wrote exactly 60 letters?
