

Number and Operations

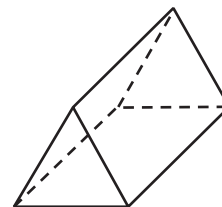

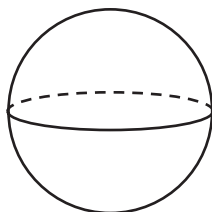
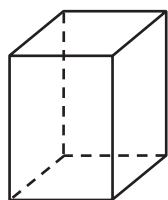
Find the quotient.

1 $5\overline{)30}$	2 $9\overline{)27}$	3 $2\overline{)14}$	4 $6\overline{)42}$
5 $8\overline{)72}$	6 $3\overline{)15}$	7 $4\overline{)36}$	8 $12\overline{)60}$
9 $3\overline{)24}$	10 $8\overline{)64}$	11 $7\overline{)56}$	12 $11\overline{)55}$
13 $10\overline{)90}$	14 $4\overline{)16}$	15 $7\overline{)49}$	16 $5\overline{)45}$
17 $11\overline{)88}$	18 $6\overline{)54}$	19 $8\overline{)32}$	20 $12\overline{)96}$

Geometry

Circle each prism and mark an "X" over each pyramid.

21



22

