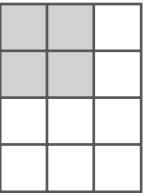
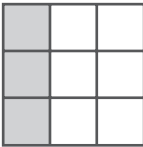
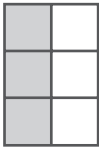



Number and Operations

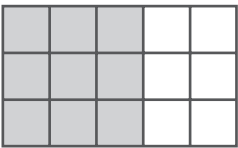
Write a fraction for the shaded part of the figure.


1 

2 

3 

4 

5 

6 

Reasoning and Proof

Solve.

- 7 Ron is packing 185 books at the bookstore. One carton holds 20 books. How many full cartons can he pack? How many books will be left over?

- 8 There are 4 bus seats in each row. Passengers fill up each row before starting a new row. If there are 39 passengers on the bus, how many rows are filled? How many passengers are in the last row?
