

Data Analysis and Probability

You spin a spinner numbered 1–12. Write *impossible* or *certain*.


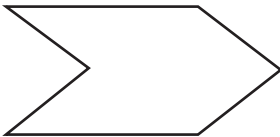
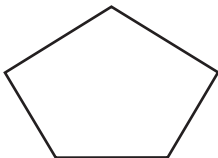
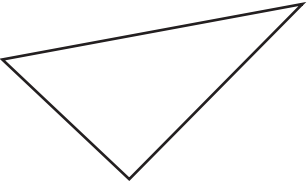
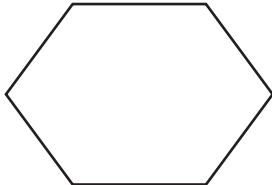

- 1 The result is a number greater than 12. _____
- 2 The result is a number from 1 to 12. _____
- 3 The result is either even or odd. _____
- 4 The result is the number of days in a month. _____

Circle the result that is more likely.

- 5 The result is a number less than 10. OR The result is a multiple of 6.
- 6 The result is a multiple of 11. OR The result is greater than 3.
- 7 The result is your age in years. OR The result is less than your age in years.

Geometry

Write *triangle*, *quadrilateral*, *pentagon* or *none of them*.

<p>8</p>  <p>_____</p>	<p>9</p>  <p>_____</p>	<p>10</p>  <p>_____</p>
<p>11</p>  <p>_____</p>	<p>12</p>  <p>_____</p>	<p>13</p>  <p>_____</p>