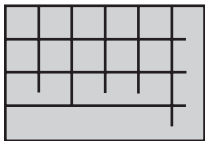


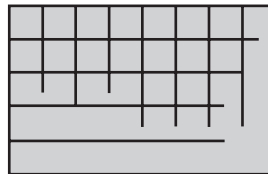
Algebra

Write a multiplication sentence to find the number of tiles in the picture.

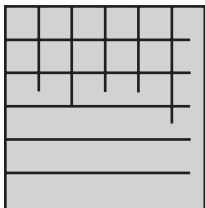
1



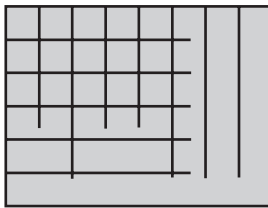
2



3



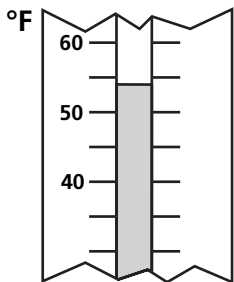
4



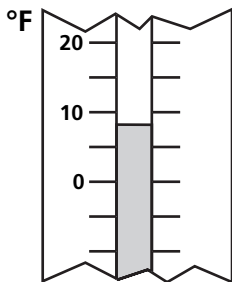
Measurement

Write the temperature shown on the thermometer.

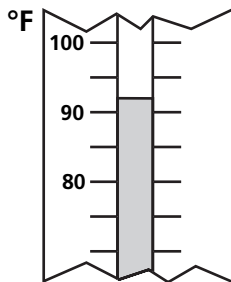
5


 °F

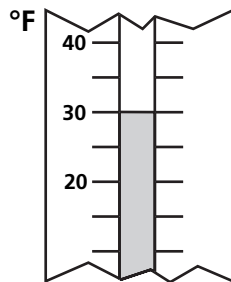
6


 °F

7


 °F

8


 °F

Write the difference between the high and low temperatures.

9

high temperature 62°F, low temperature 38°F

 °F

10

high temperature 100°F, low temperature 16°F

 °F