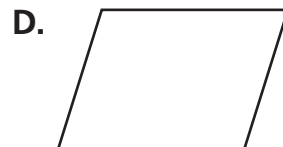
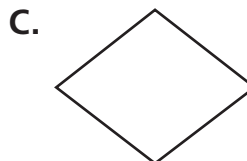



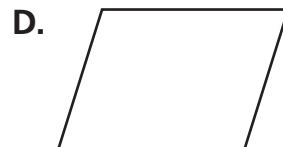
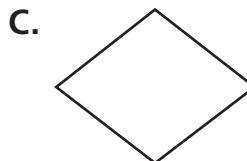
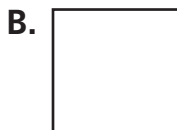
Geometry

Write the letters of the figures that are examples of the quadrilateral named.

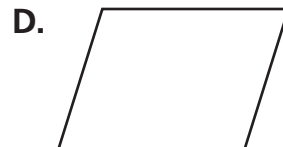
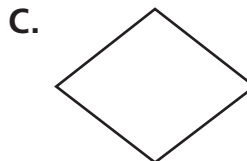
1 Parallelogram



2 Rectangle



3 Rhombus



Measurement

Write the temperature shown on the thermometer.

