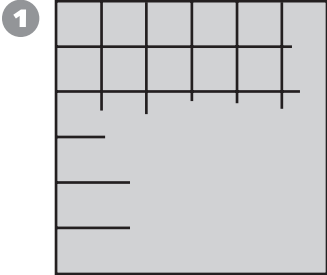
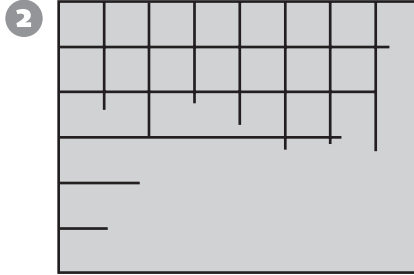


**Algebra**

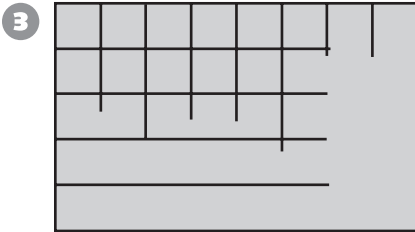
Write a multiplication sentence to find the number of tiles in the picture.



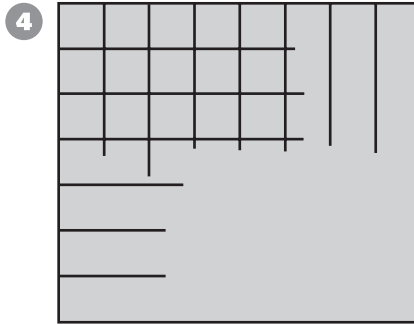
\_\_\_\_\_



\_\_\_\_\_



\_\_\_\_\_



\_\_\_\_\_

**Problem Solving**

Solve the problem. Explain your answer.

- 5 You can fill the pool from a hose that pours 10 gallons per minute. If the pool holds 3,000 gallons of water, how many hours will it take to fill?

\_\_\_\_\_

\_\_\_\_\_

\_\_\_\_\_