

Algebra

Use a pattern to complete each multiplication table.
Then complete the difference table.

1	×	3	4	Difference
1		3	4	1
2				
3				

2	×	6	7	Difference
1				
2				
3				

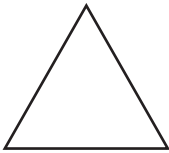
3	×	5	6	Difference
1				
2				
3				

4	×	3	5	Difference
1				
2				
3				

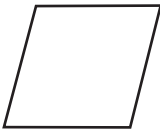
Geometry

Write a specific name to identify each figure.
Then write the number of lines of symmetry
in each figure.


5



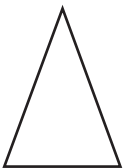
6




7



8



9



10

